

1. Zakresli, kterými mincemi bys zaplatil za nákup:



16



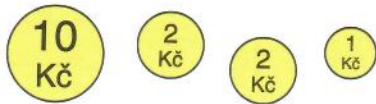
18



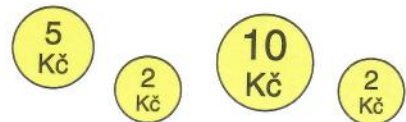
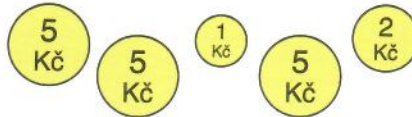
20

10 5 1

2. Sčítej hodnotu mincí:



$10 + 2 + 2 + 1 =$



3. Sčítej:

$5 + 4 + 1 + 10 =$

$16 - 6 - 3 - 6 =$

$8 + 2 + 5 + 5 =$

$19 - 9 - 4 - 5 =$

$3 + 7 + 3 + 7 =$

$17 - 7 - 5 - 5 =$

$4 + 6 + 6 + 4 =$

$18 - 8 - 1 - 9 =$

4. Kudy do úlu? Smíš postoupit na pole buď o 2 větší, nebo o 2 menší:

5	2	1	13	17	15	19	20	
12	11	5	6	12	14	16	18	19
7	8	10	12	10	13	10	12	14
2	6	9	11	7	6	2	4	9
14	8	6	7	8	5	13	18	20
13	12	4	10	12	6	8	20	12
	0	2	3	4	5	10	18	

5.	
$12 + 6 =$	
$14 + 6 =$	
$13 + 5 =$	
$12 + 8 =$	
$11 + 7 =$	
$11 + 4 =$	
$12 + 4 =$	
$10 + 7 =$	
$15 + 3 =$	
$17 + 2 =$	
$15 - 10 =$	
$14 - 10 =$	
$12 - 10 =$	
$19 - 10 =$	
$18 - 10 =$	
$3 + 17 =$	
$4 + 15 =$	
$2 + 16 =$	
$2 + 15 =$	